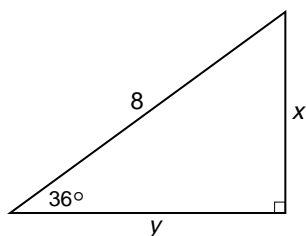


Practice

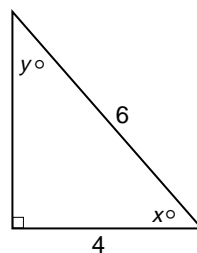
Integration: Trigonometry
Ratios in Right Triangles

Find the values of x and y . Round to the nearest tenth.

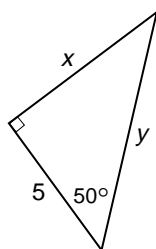
1.



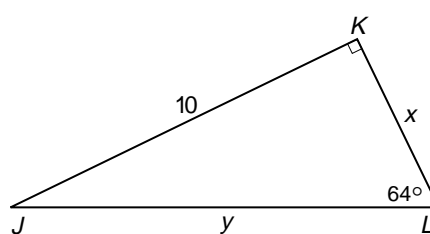
2.



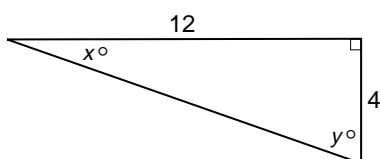
3.



4.



5.



6.

